

2.3.2. Teachers Using ICT enabled Tools for Effective Teaching- Learning Process

S.No	Content	Page No
1	<p>Various Teaching ICT tools</p> <ul style="list-style-type: none"> • Google Classroom • Google Meet • Zoom App • Google Forms 	
2	<p>Smart Boards, Projectors, PPT and Laptops Used by Faculties and Students</p>	
3	<p>ICT Enabled Labs</p> <ul style="list-style-type: none"> • IT Skills Lab 	
4	<p>ICT Peripheral Devices</p> <ul style="list-style-type: none"> • Printers • Photocopy Machine • Scanner • Bar Code Reader 	
5	<p>ICT Enabled Seminar Room and Auditorium Hall</p>	
6	<p>Workshop, Seminars , Guest Lectures arranged for Students relating to ICT</p>	




INSTITUTE OF APPLIED MEDICINES & RESEARCH

7	MOOC Learning For students • Google Academy • North Strom Academy	
8	Digital Library • DEL NET	
9	MOOC Learning For Faculties • SWAYAM • ATAL • LinkedIn Learning	
10	Encourage to use University Prescribed ICT Applications	




INSTITUTE OF APPLIED MEDICINES & RESEARCH



9th KM Stone, Namo Bharat Station, NH-9, Delhi-Meerut Road, Ghaziabad- 201206 (U.P.)



INSTITUTE OF APPLIED MEDICINES & RESEARCH



9th KM Stone, Namo Bharat Station, NH-9, Delhi-Meerut Road, Ghaziabad- 201206 (U.P.)



INSTITUTE OF APPLIED MEDICINES & RESEARCH



9th KM Stone, Namo Bharat Station, NH-9, Delhi-Meerut Road, Ghaziabad- 201206 (U.P.)




INSTITUTE OF APPLIED MEDICINES & RESEARCH

Aptitude Reasoning Practice

Previous year Dec 2022 Part-1

ushaanandpandey@gmail.com [Switch account](#)

 Not shared



* Indicates required question

1. The pie charts shows the share of tiger population in six wild life sanctuaries (A, B, C, D, E and F) of a country. Study the diagram and answer the following question: * 1 point

What will be the total number of tigers left in the six sanctuaries, if 3 tigers are killed by poachers in sanctuary E and 9 tigers are added to sanctuary A?



[Request edit access](#)



INSTITUTE OF APPLIED MEDICINES & RESEARCH

